

Surname	Centre Number	Candidate Number
Other Names		0



**GCSE – NEW**

3310U10-1



**MATHEMATICS – NUMERACY  
UNIT 1: NON-CALCULATOR  
FOUNDATION TIER**

WEDNESDAY, 2 NOVEMBER 2016 – MORNING

1 hour 30 minutes

**ADDITIONAL MATERIALS**

The use of a calculator is not permitted in this examination.  
A ruler, a protractor and a pair of compasses may be required.

**INSTRUCTIONS TO CANDIDATES**

Use black ink or black ball-point pen. Do not use gel pen or correction fluid.

You may use a pencil for graphs and diagrams only.

Write your name, centre number and candidate number in the spaces at the top of this page.

Answer **all** the questions in the spaces provided.

If you run out of space, use the continuation page at the back of the booklet, taking care to number the question(s) correctly.

Take  $\pi$  as 3.14.

**INFORMATION FOR CANDIDATES**

You should give details of your method of solution when appropriate.

Unless stated, diagrams are not drawn to scale.

Scale drawing solutions will not be acceptable where you are asked to calculate.

The number of marks is given in brackets at the end of each question or part-question.

In question 3, the assessment will take into account the quality of your linguistic and mathematical organisation, communication and accuracy in writing.

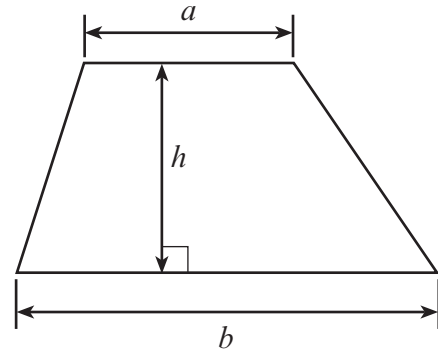
For Examiner's use only		
Question	Maximum Mark	Mark Awarded
1.	10	
2.	5	
3.	8	
4.	9	
5.	3	
6.	6	
7.	3	
8.	7	
9.	6	
10.	4	
11.	4	
<b>Total</b>	<b>65</b>	



NOV163310U10101

**Formula List - Foundation Tier**

**Area of trapezium**  $= \frac{1}{2} (a + b)h$









**BLANK PAGE**

**PLEASE DO NOT WRITE  
ON THIS PAGE**



1. A landscape gardener designs gardens.  
He uses a coordinate grid to show the position of plants and trees.  
He has started to create a plan for one of his customers.  
The table below shows some of the items that are to be put into the garden.

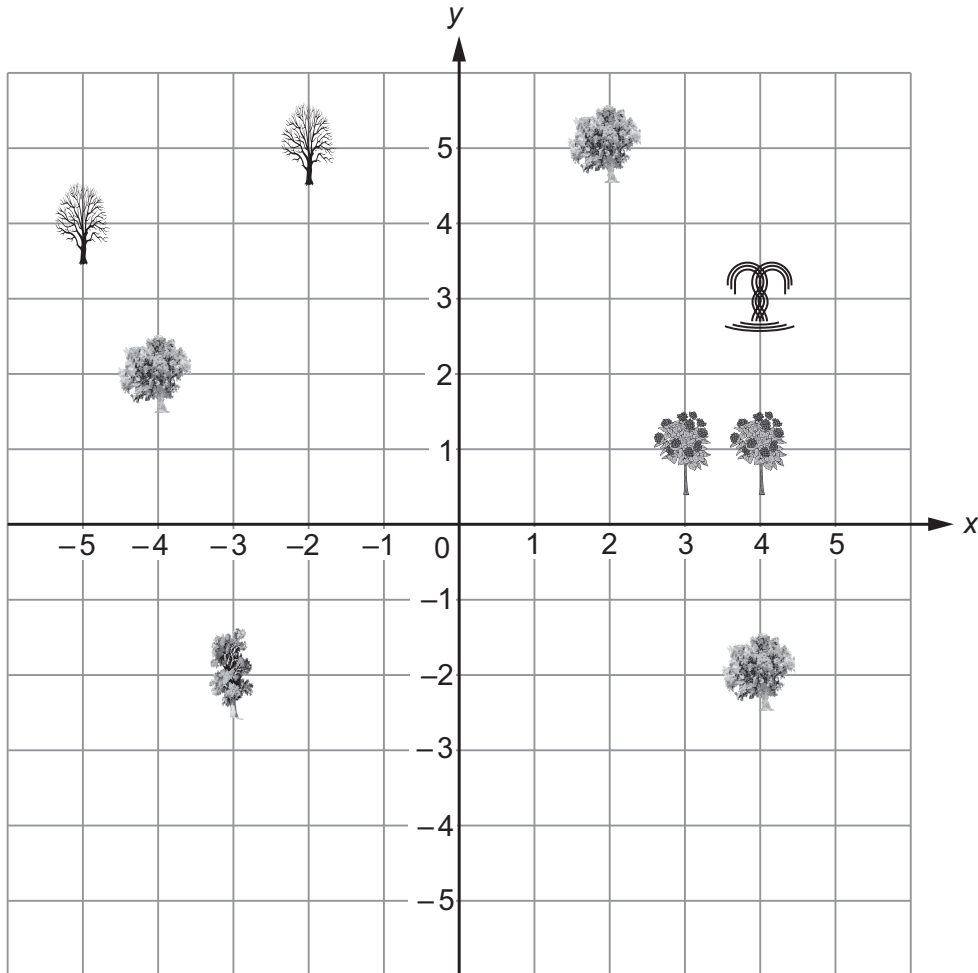
		
Wooden table & chairs	Fountain	Flowering shrub
		
Large tree	Winter tree	Flowering tree



(a) What are the coordinates of the fountain?  
Circle your answer.

[1]

- (4, 3)                  (3, 3)                  (3, -3)                  (3, 4)                  (4, -3)



(b) The gardener is going to place  
 • the wooden table and chairs at  $A (-1, 2)$   
 • a flowering shrub at  $B (1, 0)$ .

Plot the **positions** of points  $A$  and  $B$  on the grid above.

[2]

(c) The lawn in the garden is rectangular.  
It has length 4.5 metres and width 3 metres.

(i) What units should be used for the area of the lawn?  
Circle your answer.

[1]

- m                  cm                   $m^2$                    $m^3$                   yards

(ii) What is the area of the lawn?

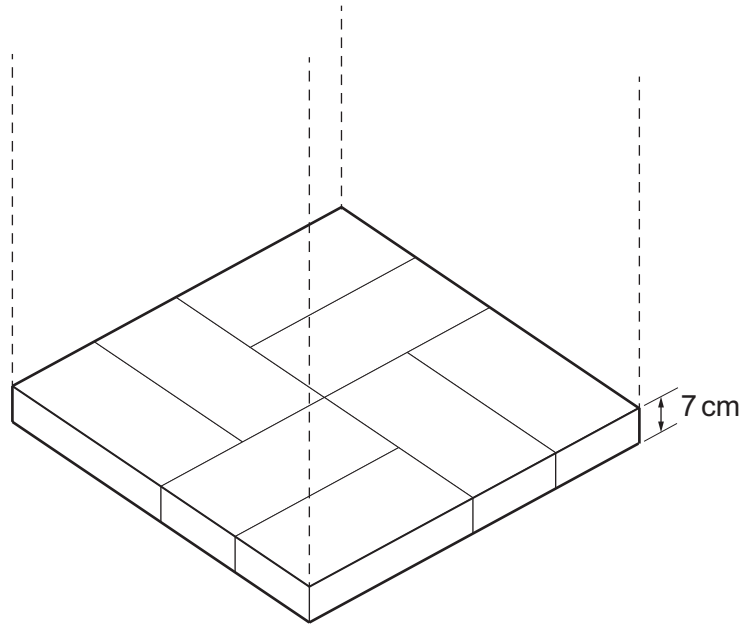
[2]

.....  
 .....



- (d) The gardener has a stack of bricks to build a barbeque.  
The stack is 154 cm tall.

Each layer of bricks has the pattern shown below.



The thickness of one layer of bricks is 7 cm.  
How many bricks are there in the stack altogether?

[4]

.....

.....

.....

.....

.....

.....

.....

.....

.....

.....

.....

.....

.....

.....

.....

.....

.....

.....

.....

.....

.....


.....

.....



2. A flight to New York had 450 passengers. A survey was completed to see what the 450 passengers did for most of their time during the flight.
- 120 passengers watched films
  - 60 passengers played games
  - 130 passengers listened to music
  - 30 passengers read a book
  - The rest slept.

Draw a pictogram to represent what the 450 passengers did for most of their time during the flight to New York. [5]

**Key:**  represents 20 passengers.

Time spent								
Watching films								
Playing games								
Listening to music								
Reading a book								
Sleeping								

.....

.....

.....

.....

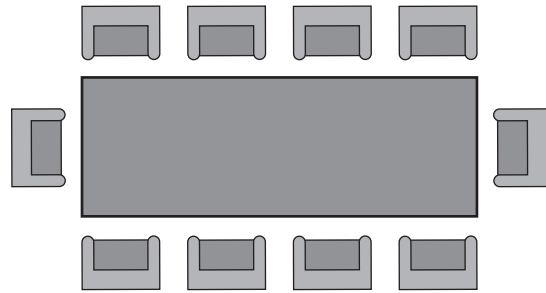
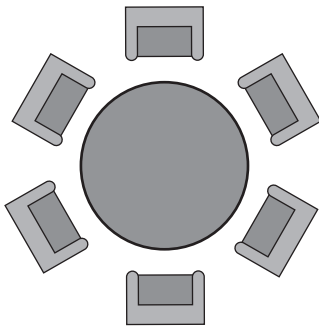


3. In this question, you will be assessed on the quality of your organisation, communication and accuracy in writing.

Aled plans a Christmas party.

He decides to use *Table Toppers* to supply tables, chairs and catering.

The circular tables each seat 6 people and the rectangular tables each seat 10 people.



*Table Toppers* charge as shown below.

<i>Table Toppers</i>		
Hiring Fees	Circular tables	£3 each
	Rectangular tables	£4 each
	Chairs	£2 each
Catering	Buffet	£9 per person
	Hog Roast	£12 per person

All the people invited to the party will fit around 3 circular tables and 2 rectangular tables. There will be no spare seats.

Aled hires 3 circular tables, 2 rectangular tables, and a chair for each person at the party. He decides to provide a buffet meal for each person.

How much does *Table Toppers* charge Aled in total?  
You must show all your working.

[6 + 2 OCW]

.....

.....

.....

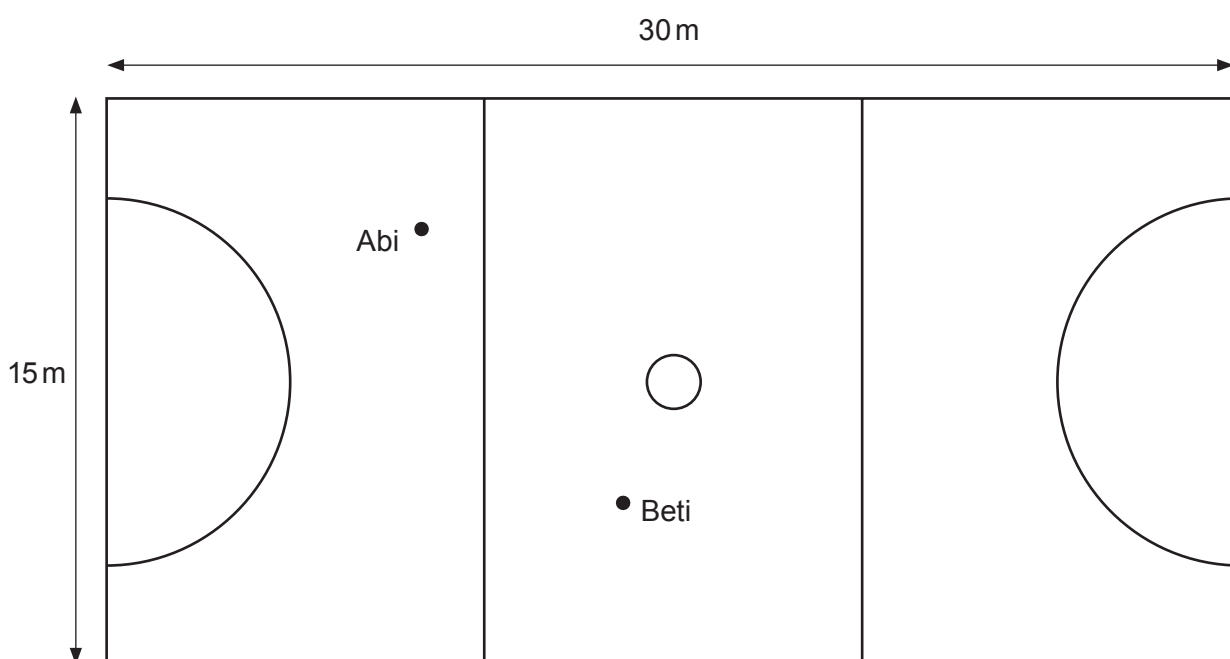
.....







4. The diagram shows a scale drawing of a netball court.



(a) All of the **straight** lines on the netball court are to be painted white.  
What is the total length of the white lines that need to be painted?

[2]

.....

.....

.....

.....

(b) The scale used in the diagram is **1 cm represents 2 m**.

Abi passes the ball to Beti.

Use the scale to work out the distance between Abi and Beti in metres.

[2]

.....

.....

.....

.....



- (c) Abi, Beti, Cala and Delaney played a practice game.  
 Abi scored 9 goals.  
 Beti scored 6 goals.  
 Cala scored 5 goals.

The mean number of goals scored by all four players was 7.  
 How many goals did Delaney score?

[4]

.....

.....

.....

.....

.....

- (d) The practice game started at 3:55 p.m.  
 Cala scored her first goal after 12 minutes.  
 At what time did Cala score her first goal?  
 Circle your answer.

[1]

3:43 p.m.      15:67      04:07      3:07 p.m.      16:07

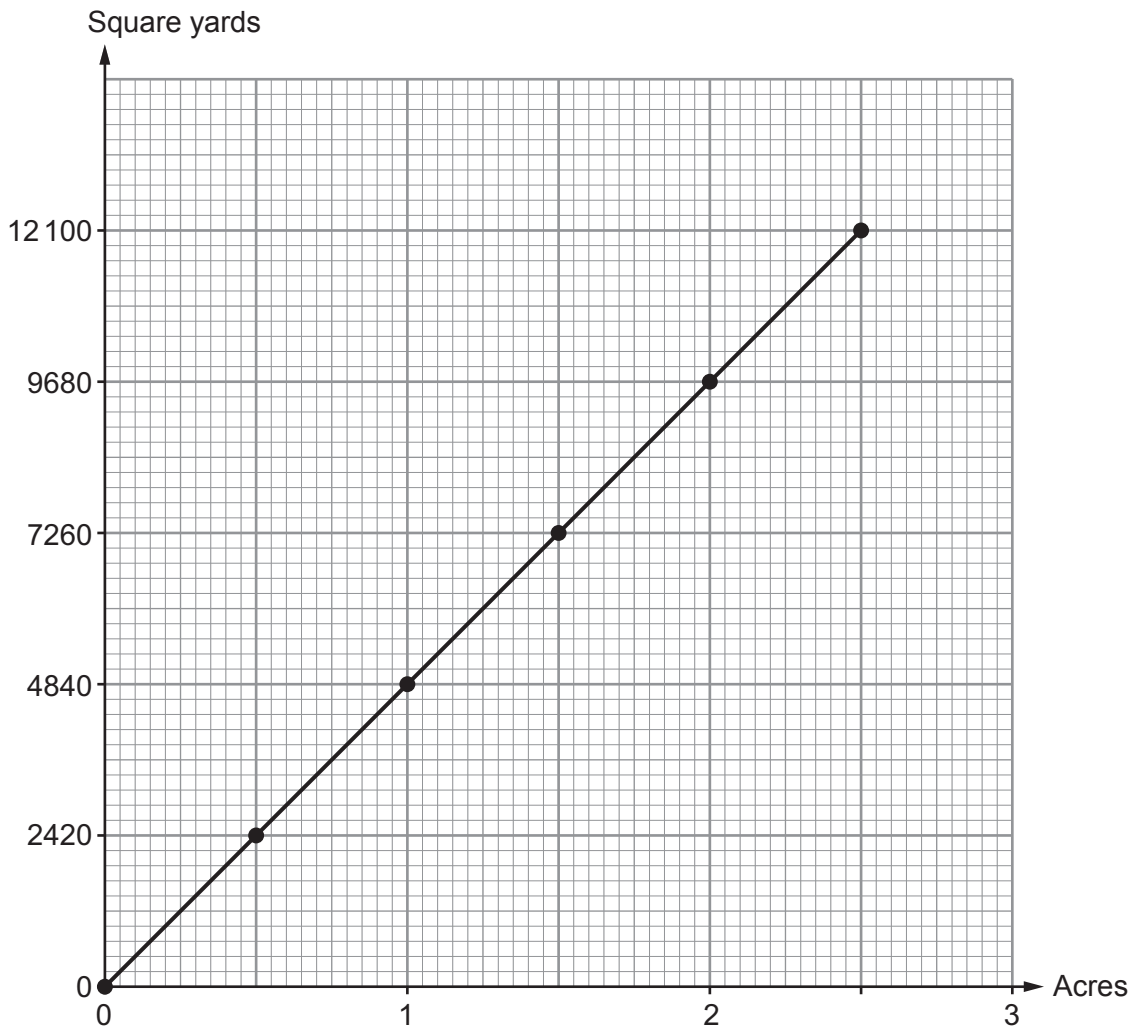
.....

.....

.....



5. Marcus is a farmer. He has his own conversion graph to change between acres and square yards.



Complete each of the following statements.

- (a) 3 acres is equal to ..... square yards. [1]

.....

.....

.....

- (b) 5.5 acres is equal to ..... square yards. [2]

.....

.....

.....



6.



Small bottle  
300ml for 66p



Medium bottle  
400ml for 92p



Large bottle  
500ml for £1.25

- (a) Roland is going to buy some orange juice for a party.  
Which size bottle of orange juice offers the best value for money?  
You must show your working.

[3]

.....

.....

.....

.....

.....

.....

.....

.....

.....

.....

.....

- (b) Galina needs to buy **exactly** 800 ml of orange juice.  
Which is the best option for Galina?  
You must show your working and consider all options.  
You must give a reason for your choice.

[3]

.....

.....

.....

.....



7. A survey was carried out to find how often teenagers buy DVDs.

The following two questions were asked in a questionnaire.

Q1. <i>Where do you live?</i>			
Q2. <i>How often do you buy DVDs?</i>			
<i>Never</i>	<i>1-10 times</i>	<i>10-15 times</i>	<i>More than 15 times</i>
<input type="checkbox"/>	<input type="checkbox"/>	<input type="checkbox"/>	<input type="checkbox"/>

(a) For each question give **one** reason why it is **not** suitable. [2]

Q1. ....

.....

Q2. ....

.....

(b) The survey was carried out by leaving copies of the questionnaire on the DVD shelves in a supermarket.

Give **one** criticism of how the survey was carried out. [1]

.....

.....

.....



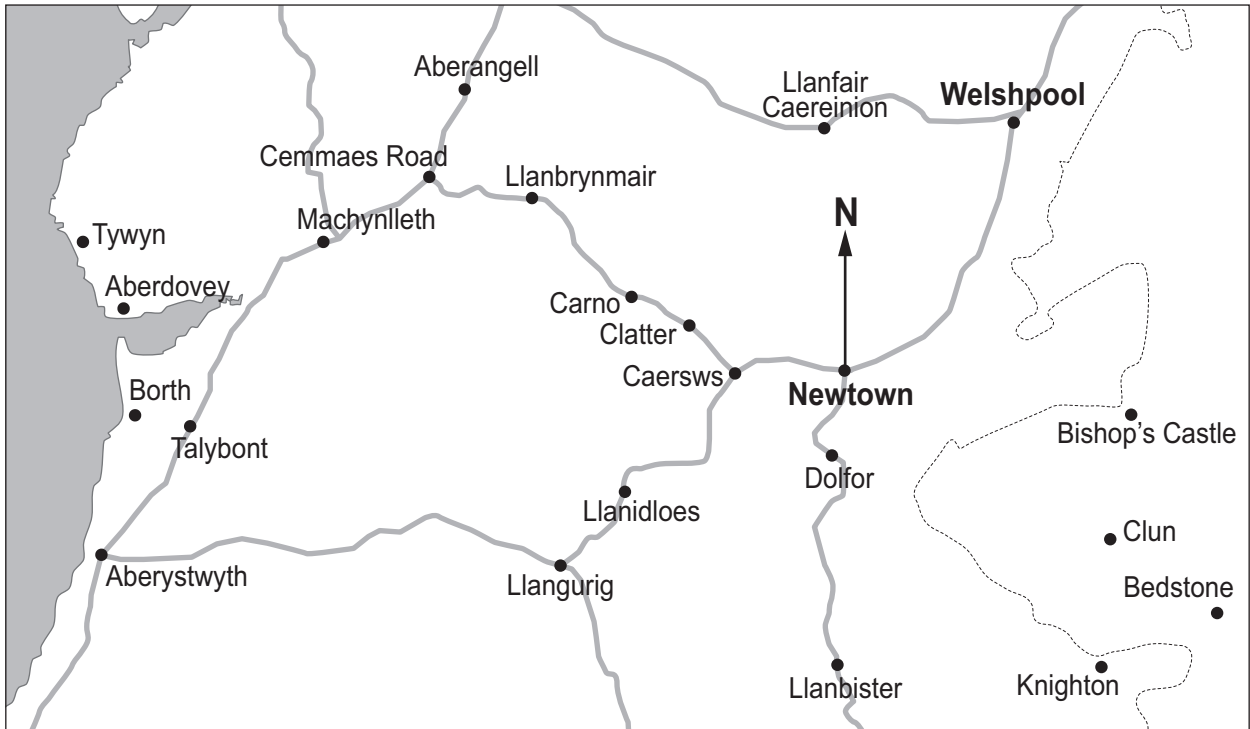
**BLANK PAGE**

**PLEASE DO NOT WRITE  
ON THIS PAGE**

**TURN OVER**



8. The map shows a part of Wales.  
The position of Newtown is shown on the map.



- (a) Write down the bearing of Welshpool from Newtown. [1]

..... °

- (b) Name the place on the map that is on a bearing of 235° from Newtown. [2]

.....





(c) The distance from Newtown to Welshpool is approximately 14 miles by road.

(i) **Estimate** the distance by road from Welshpool to Llanfair Caereinion in miles. [1]

.....

.....

..... miles

(ii) Megan lives in Cemmaes Road.  
To travel to work, she starts by heading towards Machynlleth.  
Her journey to work is approximately **40 km**.

Convert 40 km to miles. [2]

.....

.....

.....

.....

..... miles

In which town or village could Megan work? [1]

.....



9. (a) Students are taking tests in English and Welsh.  
The English test is marked out of 80.  
The Welsh test is marked out of 70.

- (i) Dyfed scores 35 in his English test.  
Estimate Dyfed's score as a percentage.  
Circle your answer.

[1]

4%                      20%                      23%                      44%                      51%

- (ii) Liam scores 22 in his Welsh test.  
Estimate Liam's score as a percentage.  
Circle your answer.

[1]

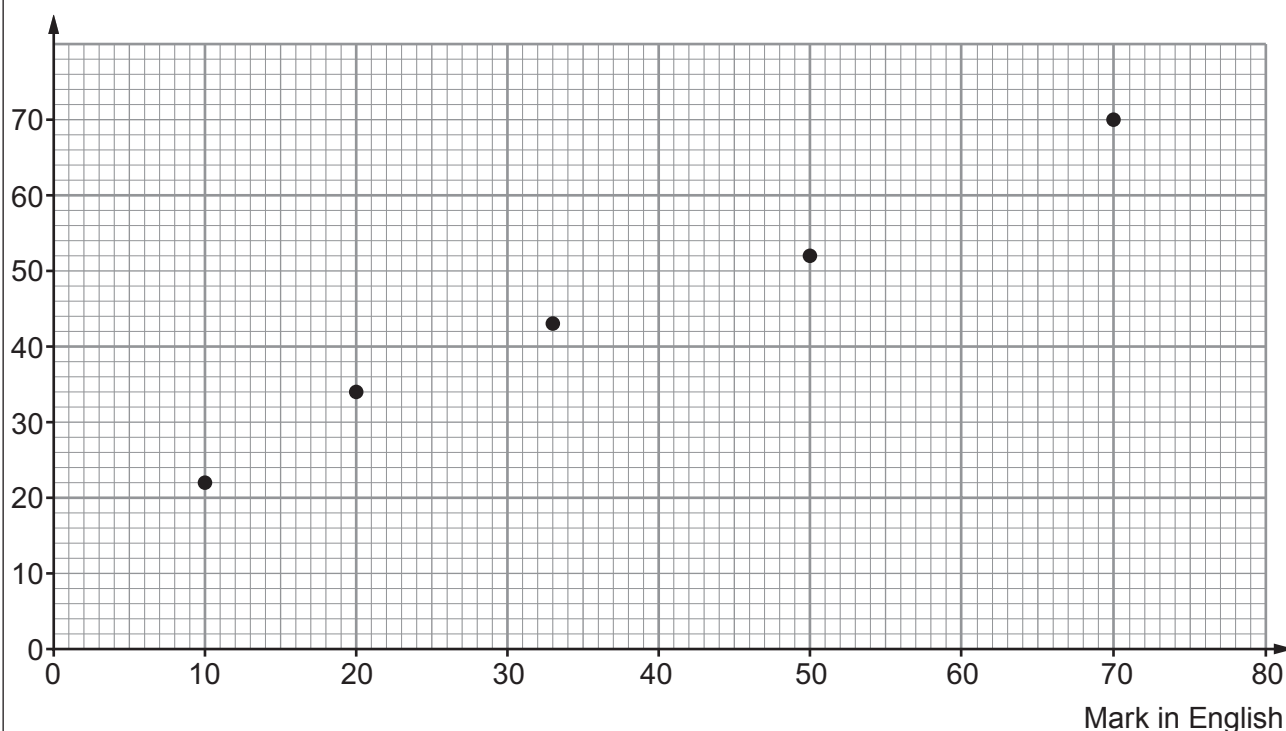
0.3%                      3%                      22%                      31%                      40%

- (b) Rowena states a hypothesis,  
'Boys do better than girls in their English tests.'

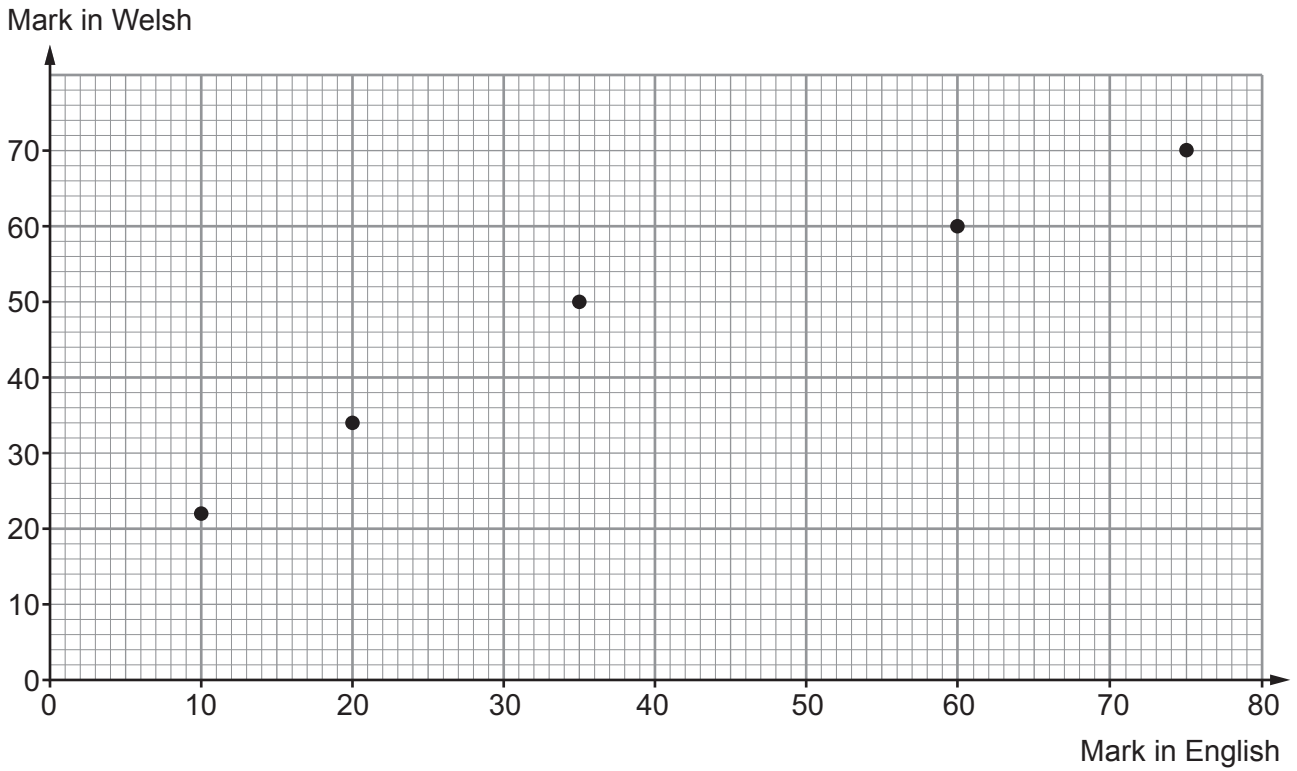
She displays the test marks for 5 girls and 5 boys in scatter diagrams.

Girls' test results

Mark in Welsh



Boys' test results



(i) Does the data support Rowena's hypothesis? You must give a reason for your answer. [1]

.....

.....

.....

.....

.....

(ii) How could Rowena improve the testing of her hypothesis? [1]

.....

.....

(c) Draw, by eye, a line of best fit to estimate how many marks you might expect a **boy** to score in a Welsh test if he scored 50 marks in his English test. [2]

..... marks





11. When it is 21:30 on a Tuesday in London, it is 02:30 on a Wednesday in Dhaka, Bangladesh.

It takes 10 hours 30 minutes to fly from Dhaka to London.  
A flight leaves Dhaka on Thursday at 13:00 local Dhaka time.

On what day and at what time should this flight arrive in London?  
Give your answer in local London time.

[4]

.....

.....

.....

.....

.....

.....

.....

.....

.....

.....

.....

.....

.....

.....

.....

.....

.....

.....

.....

.....

.....

Arrival in London:

Day ..... Time .....

**END OF PAPER**



**BLANK PAGE**

**PLEASE DO NOT WRITE  
ON THIS PAGE**





**BLANK PAGE**

**PLEASE DO NOT WRITE  
ON THIS PAGE**

