

Surname	Centre Number	Candidate Number
Other Names		0



GCSE – NEW

3310U60-1



A16-3310U60-1

**MATHEMATICS – NUMERACY
UNIT 2: CALCULATOR-ALLOWED
HIGHER TIER**

FRIDAY, 4 NOVEMBER 2016 – MORNING

1 hour 45 minutes

ADDITIONAL MATERIALS

A calculator will be required for this paper.
A ruler, a protractor and a pair of compasses may be required.

INSTRUCTIONS TO CANDIDATES

Use black ink or black ball-point pen. Do not use gel pen or correction fluid.
You may use a pencil for graphs and diagrams only.
Write your name, centre number and candidate number in the spaces at the top of this page.
Answer **all** the questions in the spaces provided.
If you run out of space, use the continuation page at the back of the booklet, taking care to number the question(s) correctly.
Take π as 3.14 or use the π button on your calculator.

INFORMATION FOR CANDIDATES

You should give details of your method of solution when appropriate.
Unless stated, diagrams are not drawn to scale.
Scale drawing solutions will not be acceptable where you are asked to calculate.
The number of marks is given in brackets at the end of each question or part-question.
In question 4(a), the assessment will take into account the quality of your linguistic and mathematical organisation, communication and accuracy in writing.

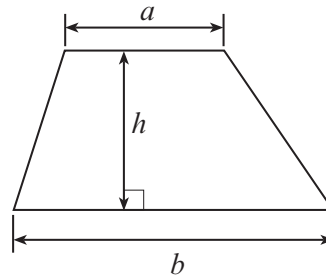
For Examiner's use only		
Question	Maximum Mark	Mark Awarded
1.	3	
2.	3	
3.	6	
4.	16	
5.	12	
6.	7	
7.	4	
8.	10	
9.	8	
10.	11	
Total	80	



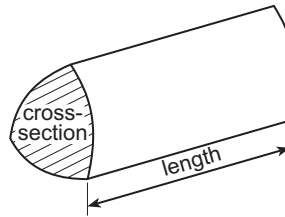
NOV163310U60101

Formula List - Higher Tier

Area of trapezium = $\frac{1}{2}(a + b)h$

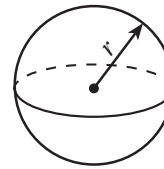


Volume of prism = area of cross-section \times length



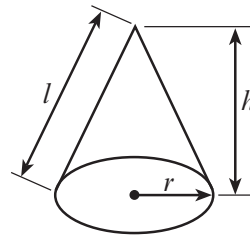
Volume of sphere = $\frac{4}{3}\pi r^3$

Surface area of sphere = $4\pi r^2$



Volume of cone = $\frac{1}{3}\pi r^2 h$

Curved surface area of cone = $\pi r l$

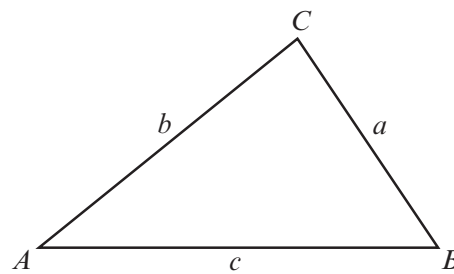


In any triangle ABC

Sine rule $\frac{a}{\sin A} = \frac{b}{\sin B} = \frac{c}{\sin C}$

Cosine rule $a^2 = b^2 + c^2 - 2bc \cos A$

Area of triangle = $\frac{1}{2} ab \sin C$



The Quadratic Equation

The solutions of $ax^2 + bx + c = 0$ where $a \neq 0$ are given by $x = \frac{-b \pm \sqrt{(b^2 - 4ac)}}{2a}$

Annual Equivalent Rate (AER)

AER, as a decimal, is calculated using the formula $\left(1 + \frac{i}{n}\right)^n - 1$, where i is the nominal interest rate per annum as a decimal and n is the number of compounding periods per annum.



1. (a) The Headteacher of Ysgol Bro Gwyn investigates building a new bike shed.

Bike sheds are built on a rectangular base of width x metres and length y metres.

The Headteacher is given a formula for working out the number of bikes, b , that can be stored in a bike shed that has a base of width x metres and length y metres.

He is told the formula only works when

- x and y are whole numbers
- x is greater than 3
- y is greater than 5

The formula is as follows:

$$b = \frac{6xy}{5}$$

According to the details the Headteacher has been given, what is the formula for calculating the length, y metres, of a bike shed x metres wide that can hold b bikes?

Circle your answer.

[1]

$$y = \frac{b-5}{6x}$$

$$x = \frac{6b}{5y}$$

$$y = \frac{b+5}{6x}$$

$$y = \frac{5b}{6x}$$

$$y = \frac{6x}{5b}$$

.....

.....

.....



- (b) The Headteacher decides to place signs around the school site to stop pupils using their bikes on grassed areas.

He introduces a new sign to pupils in the school newsletter.
The size of the sign in the newsletter is shown below.

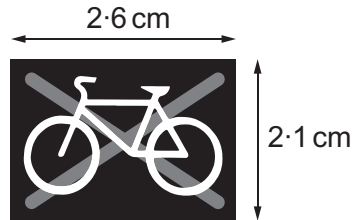


Diagram not drawn to scale

A mathematically similar new sign is placed near the side of the playing field.



Diagram not drawn to scale

It is 33.6 cm high.
How wide is this sign?

[2]

.....

.....

.....

.....

.....

.....

Width is cm



3. The wire window guard shown below is to be made.




Diagram not drawn to scale

The length of the sides of each small wire square shown is 3.3 cm.

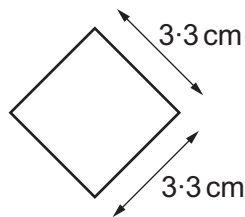


Diagram not drawn to scale

Linos considers the length of the diagonal of each small square.

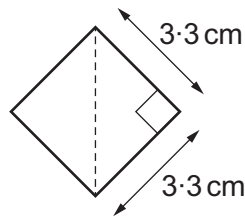


Diagram not drawn to scale

She says,

The height of the window guard is equal to 9.5 diagonals of the square.
The width of the window guard is equal to 11 diagonals of the square.



(b) The diagram shows the cross-section of one part of her run.

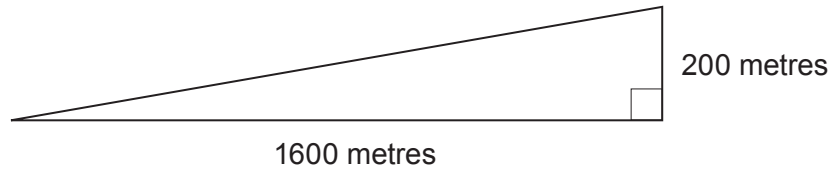


Diagram not drawn to scale

Calculate the angle of elevation of the road.

[3]

.....

.....

.....

(c)

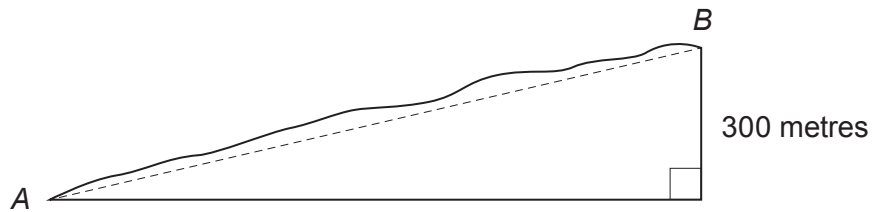


Diagram not drawn to scale

Gwenda runs on another section of uneven road from *A* to *B*.
 The rise in this section of the road is 300 metres.
 The angle of elevation of *B* from *A* is 10° .

(i) Calculate an estimate of how far Gwenda has run.
 State any assumption you have made.

[4]

.....

.....

.....

.....

Assumption:

.....

(ii) What is the impact of your assumption on your answer?

[1]

.....

.....

3310U601
09



5. Rhodri has carried out an experiment to measure the diameters of 20 spherical dust particles, in microns.

Here are his results.

Diameter, d (microns)	Frequency
$1 \leq d < 2$	2
$2 \leq d < 4$	6
$4 \leq d < 5$	8
$5 \leq d < 9$	4

- (a) (i) Calculate an estimate of the mean diameter of a dust particle. [4]

.....

.....

.....

.....

.....

.....

- (ii) Rhodri measures the diameters of another 25 dust particles.

Rhodri is told,

'The ratio of dust particles with diameters less than 4 microns to those with diameters greater than or equal to 4 microns is 7 : 8.'

He finds this fact is true when he considers all 45 dust particles.

How many of the extra 25 dust particles have a diameter of less than 4 microns?
You must show your working. [3]

.....

.....

.....

.....

.....

.....



7. Here is some information from a 2014 geographical journal:

- Population of the UK: 6.5×10^7 , correct to the nearest 1 000 000
- Area of the UK: 244 000 km², correct to the nearest 1000 km²

Using these figures, calculate the greatest possible value for the population density of the UK, in population per km². [4]

.....

.....

.....

.....

.....

.....

.....

.....

.....

.....

.....



8. A confectionary company is designing a new chocolate-covered biscuit in the shape of a square-based pyramid. The centre of the square base is labelled O . Each biscuit will have base sides of length 3.4 cm, and a vertical height of 2.1 cm.

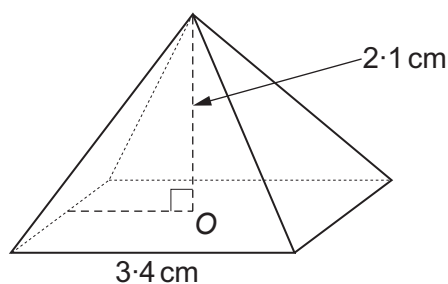


Diagram not drawn to scale

- (a) Calculate the angle that one of the triangular faces makes with the base of the pyramid. [4]

.....

.....

.....

.....

.....

- (b) The company knows that it costs $0.08p$ per cm^2 to apply a chocolate covering. Calculate the cost of applying a chocolate covering to all 5 faces of a biscuit. [6]

.....

.....

.....

.....

.....

.....

.....

.....

.....

.....



(b) Circle either TRUE or FALSE for each statement given below.

[2]

STATEMENT		
A nail double the height of a size A nail will have a total height of 28.8 mm.	TRUE	FALSE
A nail double the height of a size A nail will be 8 times the weight of a size A nail.	TRUE	FALSE
A nail 3 times the height of a size A nail will have a total surface area 6 times that of a size A nail.	TRUE	FALSE
When $r = 0.8$ mm, the number of nails that could be produced from the same metal cuboid will be double the number of size A nails.	TRUE	FALSE



BLANK PAGE

**PLEASE DO NOT WRITE
ON THIS PAGE**



10. Huw wants to open a savings account.
Here are the details of savings accounts advertised by two local Welsh banks.

Banc Padarn
Nominal interest rate of 1.98%
per annum
Interest paid monthly

Banc Teilo
AER 1.99%

(a) (i) What is 1.98% as a decimal?
Circle your answer. [1]

- 0.0198 0.198 1.098 1.98 98.0

(ii) Which of these two banks should Huw choose in order to gain the most interest per annum?
You must show your working. [4]

.....
.....
.....
.....
.....
.....
.....
.....
.....
.....
.....



.....

.....

.....

.....

.....

.....

.....

.....

.....

.....

Date Tax Matthew would have to pay

END OF PAPER



BLANK PAGE

**PLEASE DO NOT WRITE
ON THIS PAGE**



BLANK PAGE

**PLEASE DO NOT WRITE
ON THIS PAGE**

