

Surname	Centre Number	Candidate Number
Other Names		0



GCSE – NEW

3310U60-1



**MATHEMATICS – NUMERACY
UNIT 2: CALCULATOR-ALLOWED
HIGHER TIER**

THURSDAY, 8 JUNE 2017 – MORNING

1 hour 45 minutes

ADDITIONAL MATERIALS

A calculator will be required for this paper.
A ruler, a protractor and a pair of compasses may be required.

INSTRUCTIONS TO CANDIDATES

Use black ink or black ball-point pen. Do not use gel pen or correction fluid.
You may use a pencil for graphs and diagrams only.
Write your name, centre number and candidate number in the spaces at the top of this page.
Answer **all** the questions in the spaces provided.
If you run out of space, use the continuation page at the back of the booklet, taking care to number the question(s) correctly.
Take π as 3.14 or use the π button on your calculator.

INFORMATION FOR CANDIDATES

You should give details of your method of solution when appropriate.
Unless stated, diagrams are not drawn to scale.
Scale drawing solutions will not be acceptable where you are asked to calculate.
The number of marks is given in brackets at the end of each question or part-question.
In question 6, the assessment will take into account the quality of your linguistic and mathematical organisation, communication and accuracy in writing.

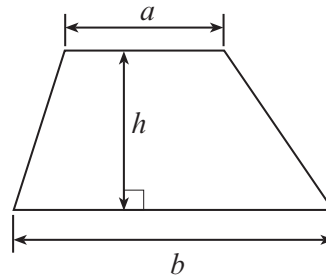
For Examiner's use only		
Question	Maximum Mark	Mark Awarded
1.	3	
2.	2	
3.	4	
4.	4	
5.	8	
6.	6	
7.	8	
8.	6	
9.	3	
10.	5	
11.	8	
12.	7	
13.	7	
14.	9	
Total	80	



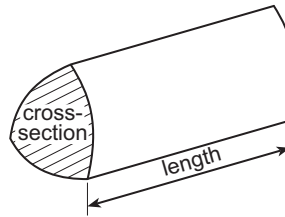
JUN173310U60101

Formula List - Higher Tier

Area of trapezium = $\frac{1}{2}(a + b)h$

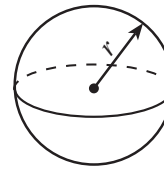


Volume of prism = area of cross-section \times length



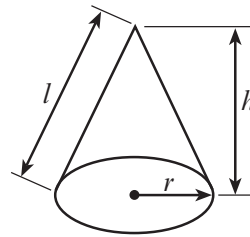
Volume of sphere = $\frac{4}{3}\pi r^3$

Surface area of sphere = $4\pi r^2$



Volume of cone = $\frac{1}{3}\pi r^2 h$

Curved surface area of cone = $\pi r l$

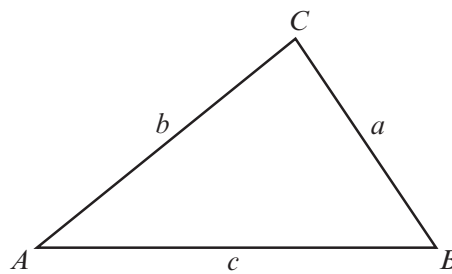


In any triangle ABC

Sine rule $\frac{a}{\sin A} = \frac{b}{\sin B} = \frac{c}{\sin C}$

Cosine rule $a^2 = b^2 + c^2 - 2bc \cos A$

Area of triangle = $\frac{1}{2} ab \sin C$



The Quadratic Equation

The solutions of $ax^2 + bx + c = 0$ where $a \neq 0$ are given by $x = \frac{-b \pm \sqrt{(b^2 - 4ac)}}{2a}$

Annual Equivalent Rate (AER)

AER, as a decimal, is calculated using the formula $\left(1 + \frac{i}{n}\right)^n - 1$, where i is the nominal interest rate per annum as a decimal and n is the number of compounding periods per annum.



1. Mali's scooter depreciated (decreased) in value by 24% in the **first** year.
 In all further years, her scooter depreciated by 13% of its previous year's value.
 She originally paid £850 for her scooter.
 Calculate the value of Mali's scooter after 7 years. [3]

.....

.....

.....

.....

.....

.....

.....

.....

.....

.....

.....

.....

.....

.....

.....

.....

.....

.....

.....

After 7 years, the value of Mali's scooter was £

2. Sanjay stacks three boxes in a pile.
 The heights of the boxes are 25 cm, 36 cm and 47 cm.
 They are all measured correct to the nearest centimetre.
 What is the greatest possible height of the stack of the three boxes? [2]

.....

.....

.....

.....

.....

.....

.....

.....

.....

Greatest possible height of the stack of three boxes is cm



3. *Organics4U* is planning to have its headquarters in Wales.
The manager has instructed Ffion to look for a site for the headquarters.

Here are the instructions that Ffion has been given by her manager.

'Find the point that is

- an equal distance between *Wrexham* and *Aberporth*, and
- an equal distance between *Caernarfon* and *Swansea*.

The new headquarters needs to be within 20 miles of this point.'

On the map below, shade the region, **in Wales**, that Ffion should identify for her manager. [4]



4.



Ursula is lying on her surfboard 180 metres away from the foot of a vertical cliff. The height of the cliff is 146 metres.

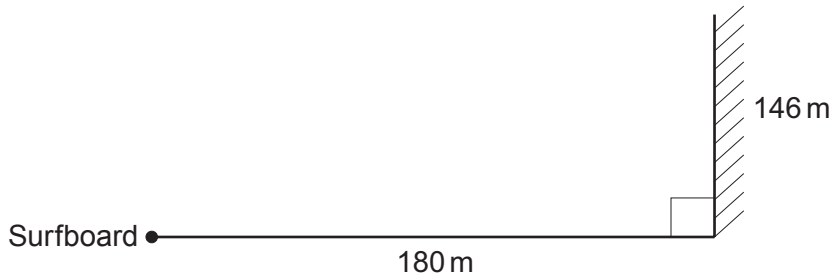


Diagram not drawn to scale

Ursula was told that if the angle of elevation of the top of the cliff from her lying position is between 42° and 45° , it is safe for her to attempt to stand on her surfboard.

Calculate the angle of elevation of the top of the cliff from Ursula's position lying on her surfboard.

State whether it is

- safe for Ursula to attempt to stand, or
- not safe as she is too near the cliff, or
- not safe as she is too far out at sea.

[4]

.....

.....

.....

.....

.....

.....

.....

.....

.....

.....



5. Marta buys a new television.

- (a) Marta wants to fit the television in a bookcase on the wall. In the shop she forgot to write down the length of the television. She did write down the height and the diagonal of the screen.

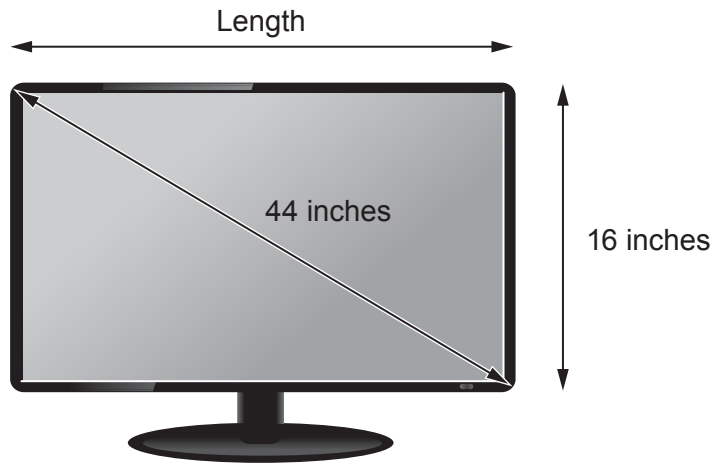


Diagram not drawn to scale

Marta needs to know the length of the screen before she opens the box, in case she wants to return the television.
Calculate the length of the screen.
Give your answer correct to 2 significant figures. [4]

.....

.....

.....

.....

.....

.....

.....

.....

.....

.....

.....

.....

.....

.....

.....

.....

.....

.....

.....

.....

.....

.....

Length is inches, correct to 2 significant figures.



(b) The television was reduced in the sale by 26% of its original price. It cost Marta £710.40 in the sale. What was the original price of the television?

[2]

.....
.....
.....
.....
.....

Original price £

(c) A television uses 1 unit of electricity every 10 hours. A unit of electricity costs 9.8p.

(i) Calculate the cost of having a television turned on for 24 hours. Circle your answer.

[1]

- £23.52
- £2.35
- 40.83p
- 23.52p
- 2.45p

.....
.....
.....

(ii) On average, Marta watches 4 hours of television each day. On average, how much a **week** does it cost her to watch television? Circle your answer.

[1]

- 27.44p
- £27.44
- £39.20
- 39.2p
- 10.78p

.....
.....
.....

3310U601
07



6. In this question, you will be assessed on the quality of your organisation, communication and accuracy in writing.

Elin's old fish tank is leaking.

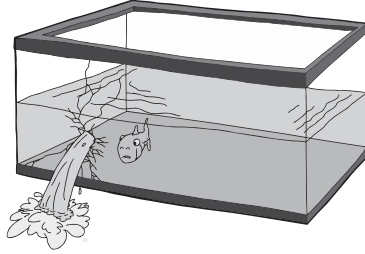


Diagram not drawn to scale

This old fish tank is in the shape of a cuboid.
The base of this tank measures 60 cm by 40 cm.
Before the leak, the height of the water level in Elin's old fish tank was 45 cm.

Elin decides to replace her fish tank with a cylindrical one.

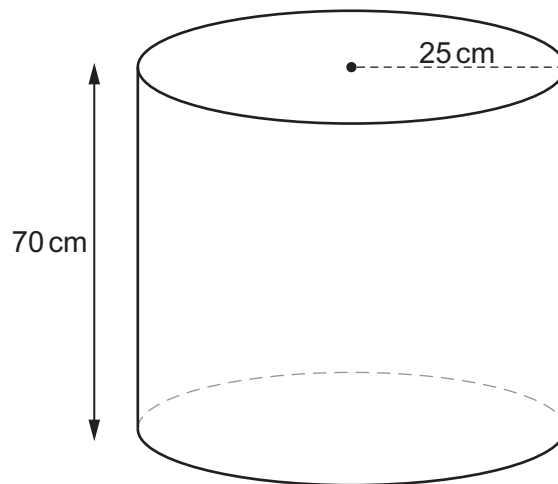


Diagram not drawn to scale

She selects a new cylindrical fish tank that has a radius of 25 cm and a height of 70 cm.

Will all the original contents, including the water and the fish, fit into this cylindrical tank?

You must show all your working.

[4 + 2 OCW]

.....

.....

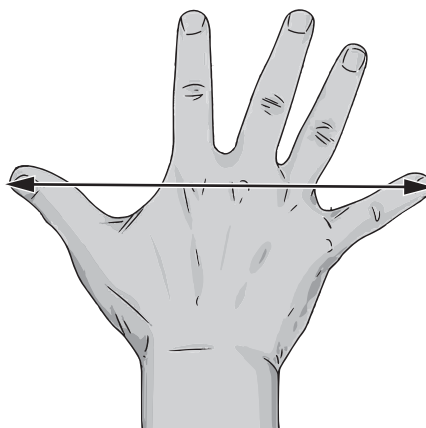
.....

.....



7. Simon plans to make gloves.

- (a) One morning, Simon decided to carry out a survey to find the mean hand span of people in Wales.



He decided to sample systematically.
He decided to sample from the first 240 people who pass him in the street during the morning.

He wanted to take 20 people's hand span measurements.
Explain how Simon could use systematic sampling to obtain 20 measurements. [1]

.....

.....

.....

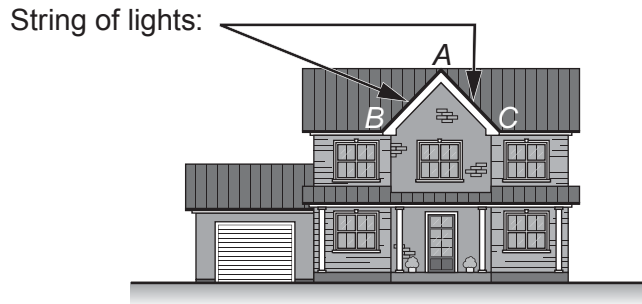
.....

.....

.....



8. The diagram below shows where Levi wants to attach a string of lights to his house.



Levi wants to attach a single string of lights from B to A and then from A to C. The diagram below shows the measurements Levi has taken.

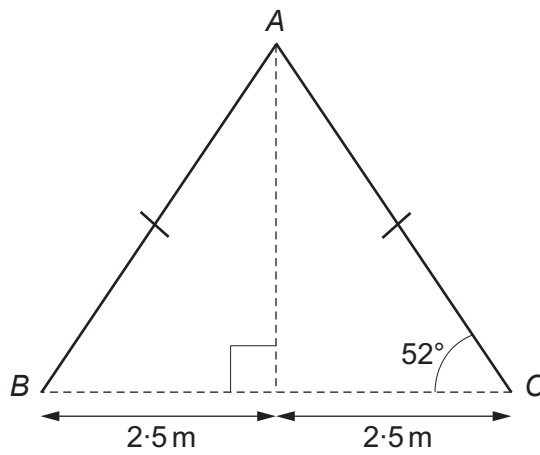


Diagram not drawn to scale

He spends £410 at the electrical store buying a string of lights. After putting up the lights, Levi finds he has 6 metres of the string of lights left over at one end.

How much did the electrical store charge Levi, per metre, for the string of lights? [6]

.....

.....

.....

.....

.....

.....

.....

.....

.....

.....



10. Fatima wants to invest some money in a savings account. She has picked up leaflets from two building societies advertising their high-interest savings accounts.

'Bannau' account

Nominal annual rate of
3.85%

Interest paid monthly

'Eryri' account

Nominal annual rate of
3.86%

Interest paid every
6 months

By comparing AERs, which account will offer Fatima the better interest rate on her investment?
You must show all your working. [5]

.....

.....

.....

.....

.....

.....

.....

.....

.....

.....

.....

.....

.....

.....

.....

.....

.....

.....

.....

.....

.....

.....



11. A company produces metal badges to be worn by its employees. The badge is made up of two parts. One part is in the shape of a sector of a circle as shown in the diagram.

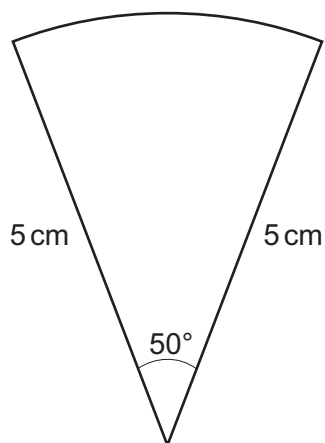


Diagram not drawn to scale

- (a) The perimeter of the sector is decorated with a coloured edging strip. Calculate the length of edging strip needed to decorate the sector.

[3]

.....

.....

.....

.....

.....

.....

- (b) The other part is in the shape of a quarter-circle of radius 3 cm.

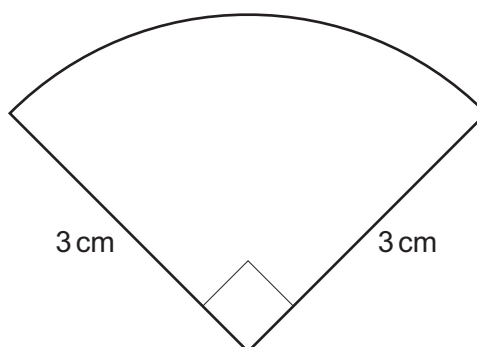


Diagram not drawn to scale



To make the badge, the two pieces are joined together with the sector in front of the quarter-circle, as shown in the diagram.
The badge has a vertical line of symmetry.

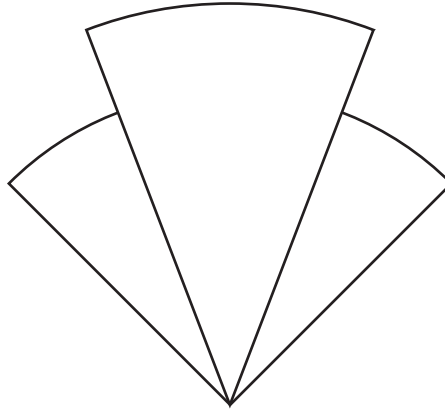


Diagram not drawn to scale

The visible surface of the front of the badge is painted.
Calculate the area that is painted.

[5]

.....

.....

.....

.....

.....

.....

.....

.....

.....

.....

.....

.....

.....

.....

.....

.....

.....

.....

.....

.....

.....

.....

.....



12. A plan view of Lowri's garden is shown below.

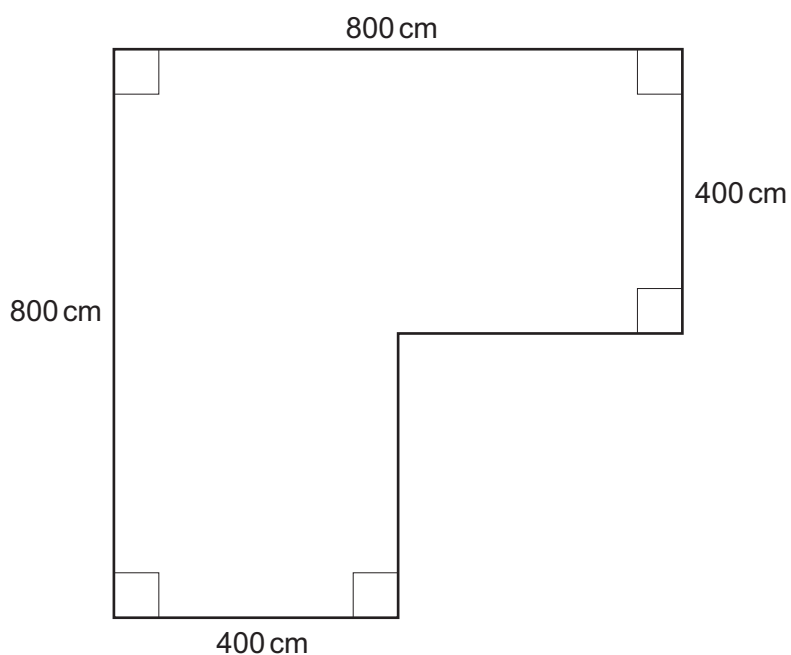


Diagram not drawn to scale

All the measurements are correct to the nearest 10 cm.

(a) Calculate the greatest possible area of Lowri's garden.

[4]

.....

.....

.....

.....

.....

.....

.....

.....

.....



13. The front views of two mathematically similar milk cartons are shown below.



Diagram not drawn to scale

(a) Circle either TRUE or FALSE for each statement given below.

[1]

STATEMENT		
The ratio of the lengths of the cartons is the same as the ratio of the heights of the cartons.	TRUE	FALSE
The ratio of the volumes of the cartons is the same as the ratio of the heights of the cartons.	TRUE	FALSE

(b) It is claimed that the larger carton contains double the amount of milk contained in the smaller carton.
Show that this claim is not true.
Explain your answer.

[3]

.....

.....

.....

.....

.....

.....

.....

.....



- (c) Another similar milk carton has a label with an area that is one quarter of the area of the label on the carton of height 24 cm.



Diagram not drawn to scale

Calculate the height of this new carton.

[3]

.....

.....

.....

.....

.....

.....



(b) Show that loan's route up this section of road is less steep than Delyth's route.
You must show all your working.

[3]

.....

.....

.....

.....

.....

.....

.....

.....

.....

.....

END OF PAPER



